



जोड़



0120CH03

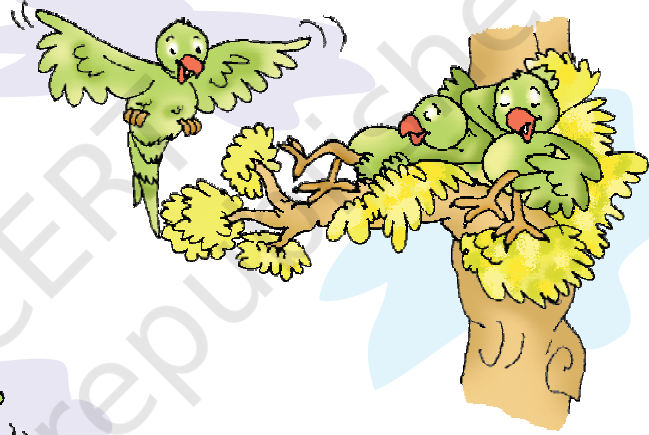


एक अधिक




एक हरा तोता,
नाच रहा था वो,
एक और आ गया,
हो गए अब दो।

दो छोटे तोते,
दाना रहे थे बीन,
एक और आ गया,
हो गए अब तीन।



तीन छोटे तोते,
उड़ने को तैयार,
एक और आ गया,
हो गए अब चार।

चार छोटे तोते,
दिखा रहे थे नाच,
एक और आ गया,
हो गए अब पाँच।



शिक्षकों के लिए




जोड़ की समझ विकसित करने के लिए पृष्ठ संख्या 140 देखें।

2019-2020





कुल मिलाकर कितने?




2 गायें

और

1 गाय

होती हैं

3 गायें






3 बच्चे

और

2 बच्चे

होते हैं

5 बच्चे




फूल

और

फूल

फूल






चिड़ियाँ



और




चिड़ियाँ



चिड़ियाँ

कुल मिलाकर कितने?

				
6	और	2	=	8

				
<input type="text"/>	और	<input type="text"/>	=	<input type="text"/>

				
<input type="text"/>	और	<input type="text"/>	=	<input type="text"/>

				
<input type="text"/>	और	<input type="text"/>	=	<input type="text"/>






कुल मिलाकर कितने?



$$4 + 3 = 7$$




$$\square + \square = \square$$

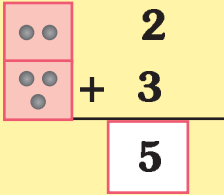


$$\square + \square = \square$$



जोड़



$$2 + 3 = 5$$


$4 + 2 = \square$

$5 + 1 = \square$

$3 + 6 = \square$

$7 + 0 = \square$

$0 + 9 = \square$

$$\begin{array}{r} 4 \\ + 2 \\ \hline \square \end{array}$$

$$\begin{array}{r} 5 \\ + 1 \\ \hline \square \end{array}$$

$$\begin{array}{r} 3 \\ + 6 \\ \hline \square \end{array}$$


$$\begin{array}{r} 7 \\ + 0 \\ \hline \square \end{array}$$

$$\begin{array}{r} 0 \\ + 9 \\ \hline \square \end{array}$$







जोड़



$$3 + 2 = \boxed{5} \text{ गुब्बारे}$$



$$3 + 0 = \boxed{3} \text{ गुब्बारे}$$




$$0 + 2 = \boxed{}$$



$$4 + 0 = \boxed{}$$




$$5 + 0 = \boxed{}$$



$$3 + 4 = \boxed{}$$




जोड़



3


+




4

=


7



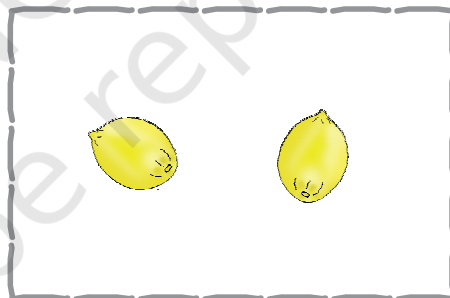
+




=




+



=



+



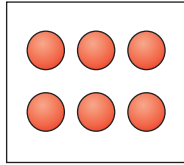
=





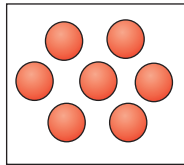
जोड़िए और मिलाइए

$3 + 2$



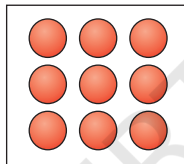
$3 + 3$

$4 + 2$



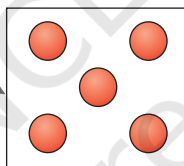
$2 + 3$

$3 + 4$



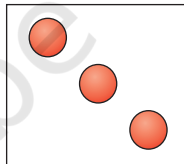
$0 + 8$

$8 + 0$



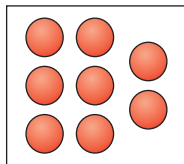
$3 + 6$

$6 + 3$



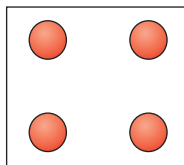
$5 + 2$

$2 + 1$



$1 + 2$

$1 + 3$



$3 + 1$

जोड़िए

$2 + 7 = \square$

$3 + 5 = \square$

$4 + 0 = \square$

$2 + 2 = \square$



$1 + 3 = \square$

$4 + 1 = \square$

$0 + 2 = \square$

$3 + 4 = \square$

$$\begin{array}{r} 3 \\ + 6 \\ \hline \end{array}$$

$$\begin{array}{r} 5 \\ + 2 \\ \hline \end{array}$$

$$\begin{array}{r} 3 \\ + 3 \\ \hline \end{array}$$

$$\begin{array}{r} 0 \\ + 8 \\ \hline \end{array}$$

$$\begin{array}{r} 6 \\ + 3 \\ \hline \end{array}$$

$$\begin{array}{r} 1 \\ + 7 \\ \hline \end{array}$$

$$\begin{array}{r} 2 \\ + 3 \\ \hline \end{array}$$

$$\begin{array}{r} 5 \\ + 0 \\ \hline \end{array}$$

$$\begin{array}{r} 3 \\ + 4 \\ \hline \end{array}$$





छूटी हुई संख्याओं को लिखिए

$$\square + \square = 5$$

$$\square + \square = 6$$

$$\square + \square = 7$$

$$\square + \square = 3$$

$$\square + \square = 4$$

$$\square + \square = 9$$

$$\square + \square = 8$$

$$\square + \square = 1$$

