


# Numbers



0119CH11



Write the number.

Draw the bundles and ones of the number.

TENS	ONES
TENS	ONES
3	4

TENS	ONES
TENS	ONES
	43

TENS	ONES
TENS	ONES

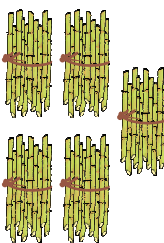



TENS	ONES
TENS	ONES
	22

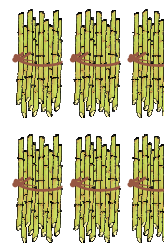



TENS	ONES
TENS	ONES

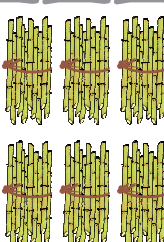
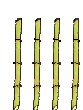



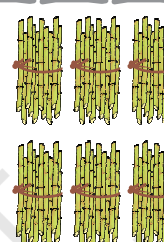
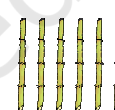



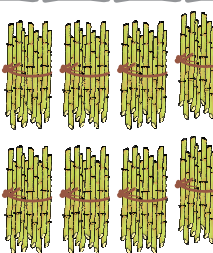


Write the number in the given space.



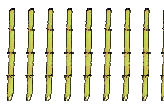

		
TENS	ONES	
<input type="text"/>	<input type="text"/>	





		
TENS	ONES	
<input type="text"/>	<input type="text"/>	

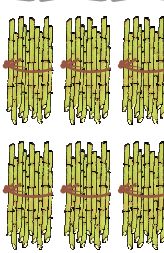



		
TENS	ONES	
<input type="text"/>	<input type="text"/>	

		
TENS	ONES	
<input type="text"/>	<input type="text"/>	

		
TENS	ONES	
<input type="text"/>	<input type="text"/>	

		
TENS	ONES	
<input type="text"/>	<input type="text"/>	

		
TENS	ONES	
<input type="text"/>	<input type="text"/>	

		
TENS	ONES	
<input type="text"/>	<input type="text"/>	



# Numbers from 51 to 70

Fill in the blanks.

		51
5 TENS	1 ONE	

		61
6 TENS	1 ONE	

		52
5 TENS	2 ONES	

6 TENS	2 ONES	

		53
5 TENS	3 ONES	

		63
6 TENS	3 ONES	

		54
5 TENS	4 ONES	

6 TENS	4 ONES	

5 TENS	5 ONES	

		65
6 TENS	5 ONES	

5 TENS	6 ONES	

6 TENS	6 ONES	

5 TENS	7 ONES	

		67
6 TENS	7 ONES	

		58
5 TENS	8 ONES	

		68
6 TENS	8 ONES	

		59
5 TENS	9 ONES	

6 TENS	9 ONES	

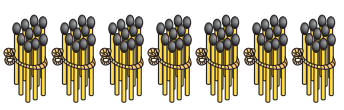

		60
5 TENS	1 TEN	

		70
6 TENS	1 TEN	



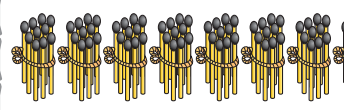

# Numbers from 71 to 90

Fill in the blanks.



71

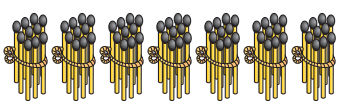

7 TENS

1 ONE



81

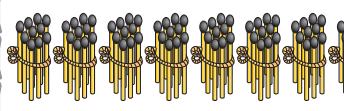

8 TENS

1 ONE

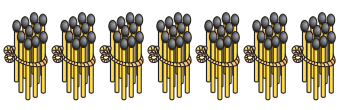

7 TENS

2 ONES



82

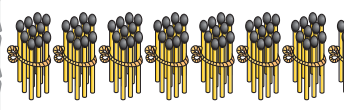

8 TENS

2 ONES



73



7 TENS

3 ONES

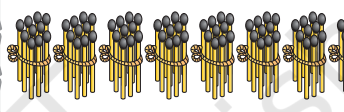

8 TENS

3 ONES



74

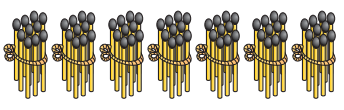

7 TENS

4 ONES

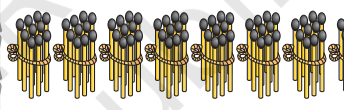

8 TENS

4 ONES

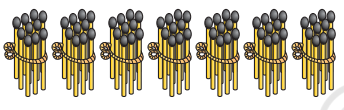

7 TENS

5 ONES



85

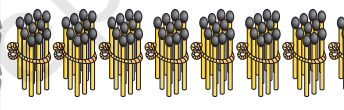

8 TENS

5 ONES



76

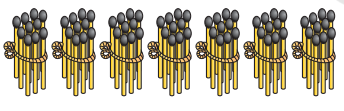

7 TENS

6 ONES



86

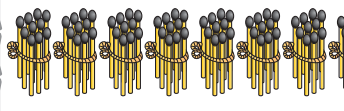

8 TENS

6 ONES

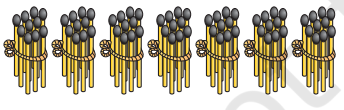

7 TENS

7 ONES

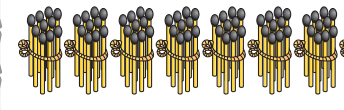

8 TENS

7 ONES

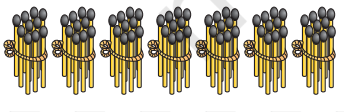

7 TENS

8 ONES



88

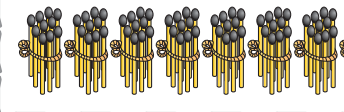

8 TENS

8 ONES



79

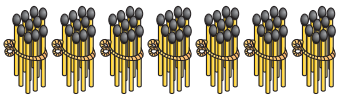
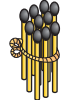
7 TENS

9 ONES



89

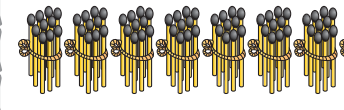
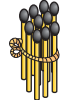
8 TENS

9 ONES



80

7 TENS

1 TEN



90

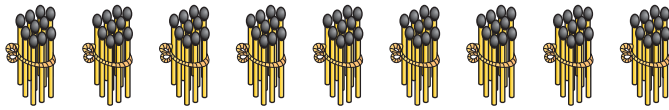

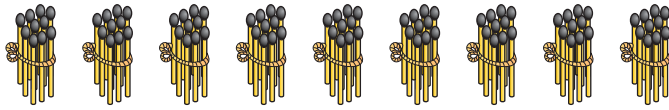

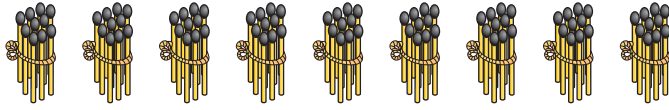

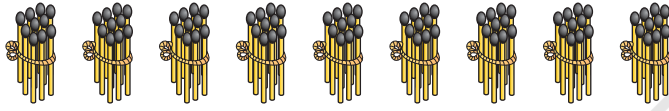

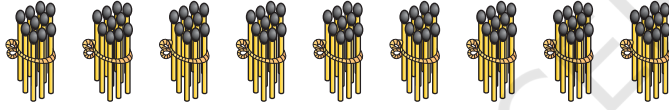
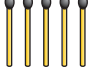
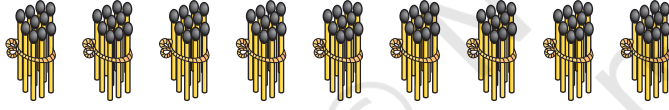

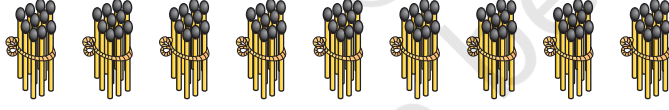

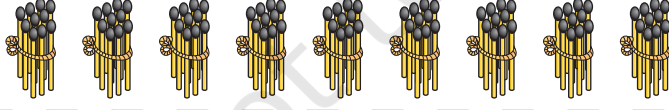

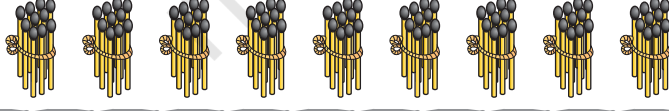

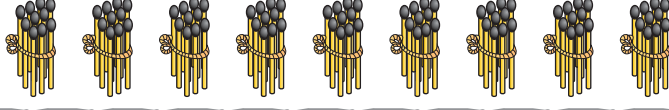
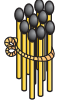
8 TENS

1 TEN



# Numbers from 91 to 100

Fill in the blanks.

		91
9 TENS	1 ONE	
		92
9 TENS	2 ONES	
		93
9 TENS	3 ONES	
		94
9 TENS	4 ONES	
		95
9 TENS	5 ONES	
		96
9 TENS	6 ONES	
		
9 TENS	7 ONES	
		
9 TENS	8 ONES	
		
9 TENS	9 ONES	
		100
9 TENS	1 TEN	





Write the missing numbers.

51	52	53	54	55	56	57	58	59	60
	62			65				69	
		73							80
			84				88		
		93		95				99	



Let us play the game of snakes and ladders.

